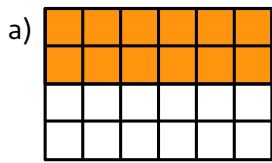
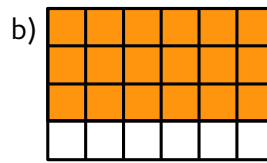


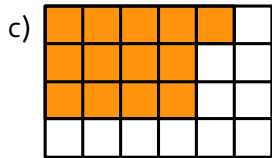
Verschiedene Teile des Rechtecks aus 6 mal 4 Quadraten sind farbig. Stelle diese Bruchteile als Brüche dar.



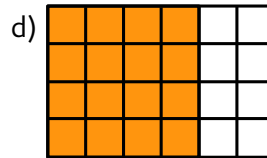
= _____



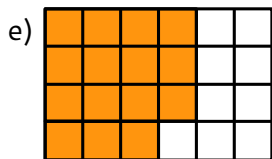
= _____



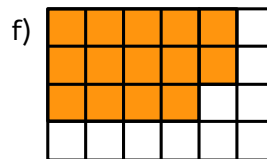
= _____



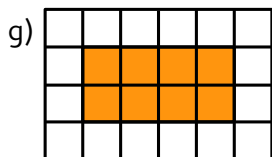
= _____



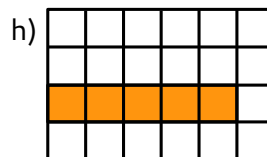
= _____




= _____



= _____




= _____




= _____



= _____



= _____



= _____