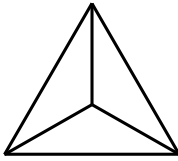
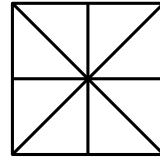


Male den entsprechenden Bruchteil in der nebenstehenden Figur an.

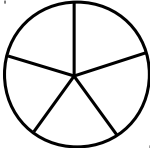
a) $\frac{1}{3}$



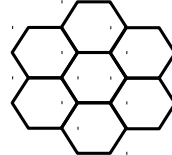
b) $\frac{1}{8}$



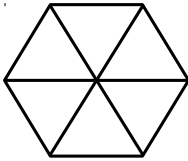
c) $\frac{2}{5}$



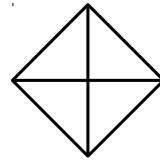
d) $\frac{3}{7}$



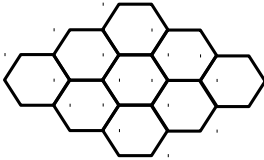
e) $\frac{2}{6}$



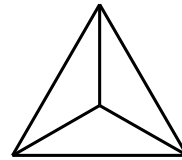
f) $\frac{3}{4}$



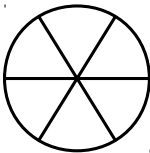
g) $\frac{2}{9}$



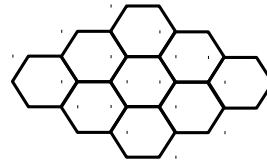
h) $\frac{2}{3}$



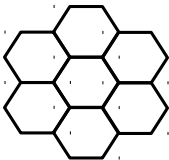
i) $\frac{3}{6}$



j) $\frac{5}{9}$



k) $\frac{6}{7}$



l) $\frac{7}{8}$

