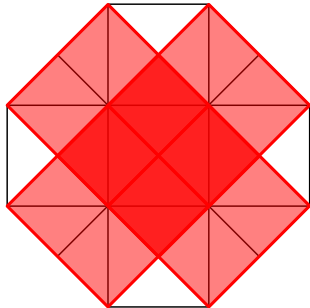
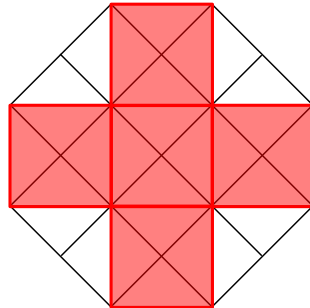


Wie oft stecken diese Figuren in dem großen Achteck?

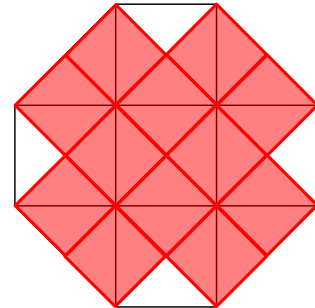
großes Quadrat: **5** mal




mittleres Quadrat: **5** mal



kleines Quadrat: **12** mal



großes Dreieck: **24** mal



kleines Dreieck: **28** mal

