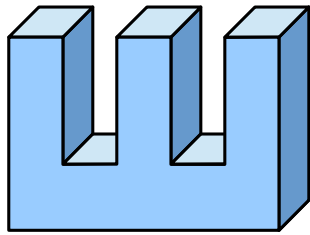
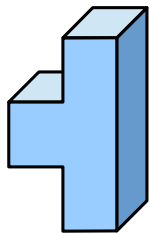


Hier siehst du einige Körper. Aus wie vielen Flächen bestehen die einzelnen Körper jeweils?

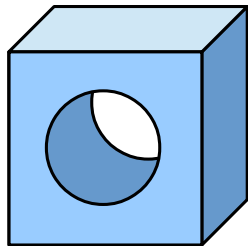
1.



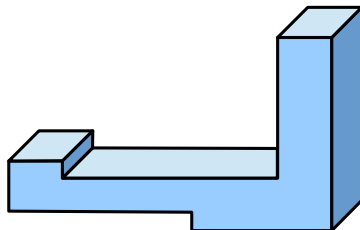
2.



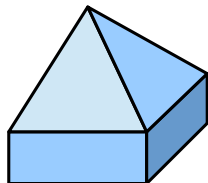
3.



4.



5.



6.

