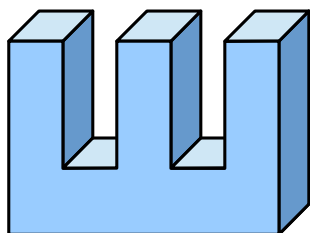


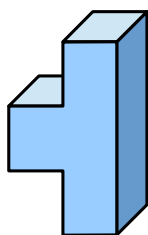
Hier siehst du einige Körper. Aus wie vielen Flächen bestehen die einzelnen Körper jeweils?

1.



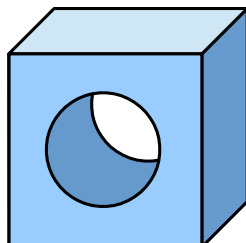
aus **14** Flächen

2.



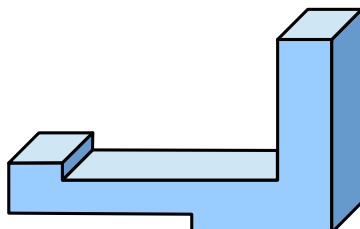
aus **10** Flächen

3.



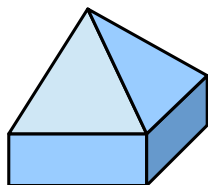
aus **7** Flächen

4.




aus **12** Flächen

5.



aus **9** Flächen

6.



aus **10** Flächen